



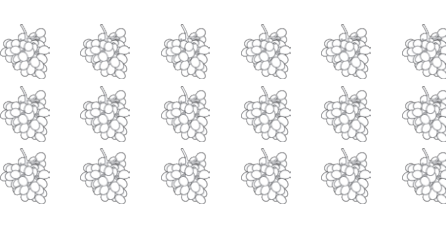

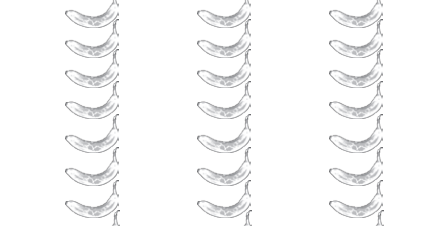




Multiplication Using Arrays

Write two multiplication sentences for each array.
The first one has been done for you.



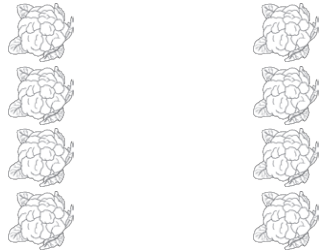
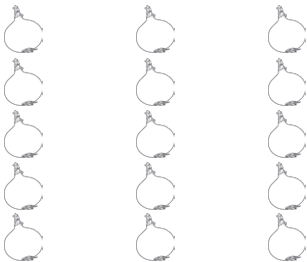


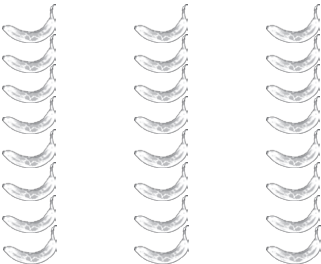


		
$2 \times 5 = 10$ $5 \times 2 = 10$		
		
		

Can you think of a different calculation and draw your own array?

--	--	--

Multiplication Using Arrays

Write two multiplication sentences for each array.
The first one has been done for you.

		
$2 \times 5 = 10$ $5 \times 2 = 10$	$3 \times 4 = 12$ $4 \times 3 = 12$	$4 \times 2 = 8$ $2 \times 4 = 8$
		
$5 \times 3 = 15$ $3 \times 5 = 15$	$3 \times 6 = 18$ $6 \times 3 = 18$	$4 \times 5 = 20$ $5 \times 4 = 20$
		
$8 \times 3 = 24$ $3 \times 8 = 24$	$4 \times 7 = 28$ $7 \times 4 = 28$	$3 \times 9 = 27$ $9 \times 3 = 27$

Can you think of a different calculation and draw your own array?

--	--	--